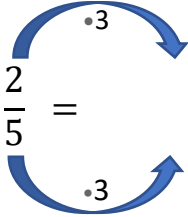


### 3. Erweitere

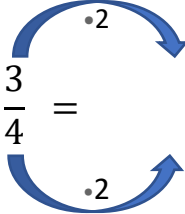
Brüche mit größerem Zähler

Name: \_\_\_\_\_

1.)  $\frac{2}{5} =$



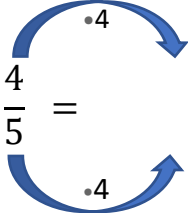
2.)  $\frac{3}{4} =$



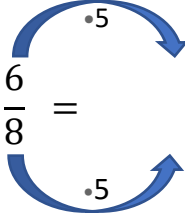
1.)  $\frac{6}{15}$

2.)  $\frac{6}{8}$

3.)  $\frac{4}{5} =$



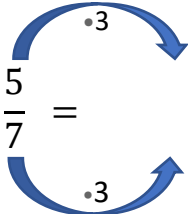
4.)  $\frac{6}{8} =$



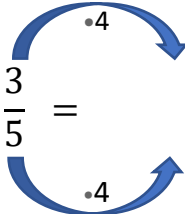
3.)  $\frac{16}{20}$

4.)  $\frac{30}{40}$

5.)  $\frac{5}{7} =$



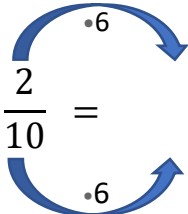
6.)  $\frac{3}{5} =$



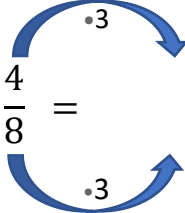
5.)  $\frac{15}{21}$

6.)  $\frac{12}{20}$

7.)  $\frac{2}{10} =$



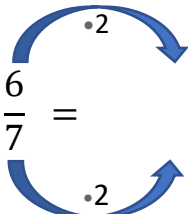
8.)  $\frac{4}{8} =$



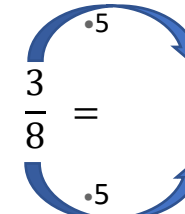
7.)  $\frac{12}{60}$

8.)  $\frac{12}{24}$

9.)  $\frac{6}{7} =$



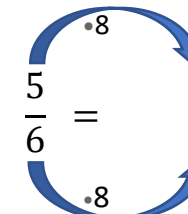
10.)  $\frac{3}{8} =$



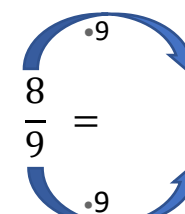
9.)  $\frac{12}{14}$

10.)  $\frac{15}{40}$

11.)  $\frac{5}{6} =$



12.)  $\frac{8}{9} =$



11.)  $\frac{40}{48}$

12.)  $\frac{72}{81}$